
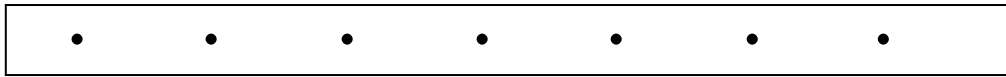
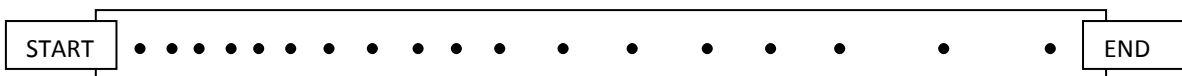
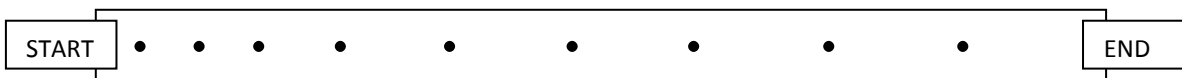


# TICKER TIMER PROBLEMS

What is the average velocity of the following ticker timer tapes?



What is the initial velocity and final velocity of each of the following ticker timer tapes?



What is the acceleration of the last two ticker timer tapes?